

## 3-4 Graphing Radical Functions

Objectives:

3-4a: I can graph radical functions by hand.

3-4b: I can identify the transformations of a radical function.

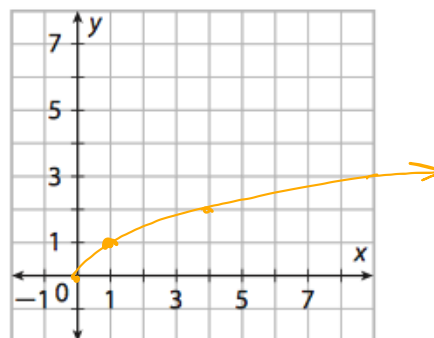
3-4c: I can write the equation of a radical function from a graph.

Mar 12-10:11 PM

Graph the following and state the domain, range, and end behavior

$$f(x) = \sqrt{x}$$

$x$	$f(x) = \sqrt{x}$
0	0
1	1
4	2
9	3



Domain:  $[0, \infty)$

Range:  $[0, \infty)$

End Behavior

$x \rightarrow 0, y \rightarrow 0$

$x \rightarrow \infty, y \rightarrow \infty$

Mar 12-10:12 PM

Transformation Form:

$$f(x) = a(x-h) + k$$

Transformation Form:

$$f(x) = a\sqrt{(x-h)} + k$$

	Vertical (Range)	Horizontal (Domain)
Shift		
Stretch		-----
Reflection		-----

Domain changes

Range changes

Graph, state the transformations, and find the Domain and Range

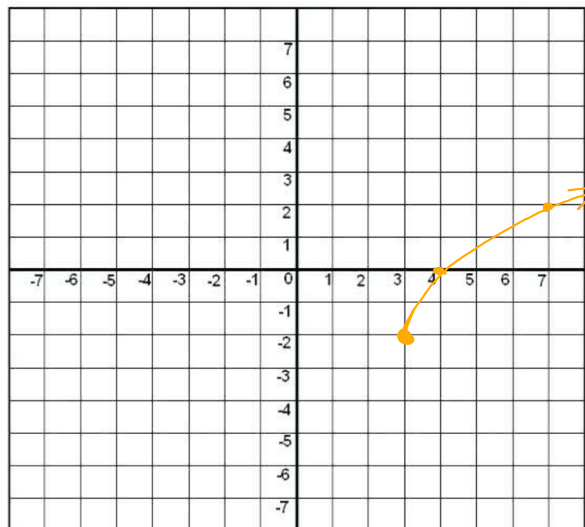
$$g(x) = 2\sqrt{x-3} - 2$$

Domain:

right 3  
down  
v. s. of 2

Range:

Transformations:



Mar 12-10:19 PM

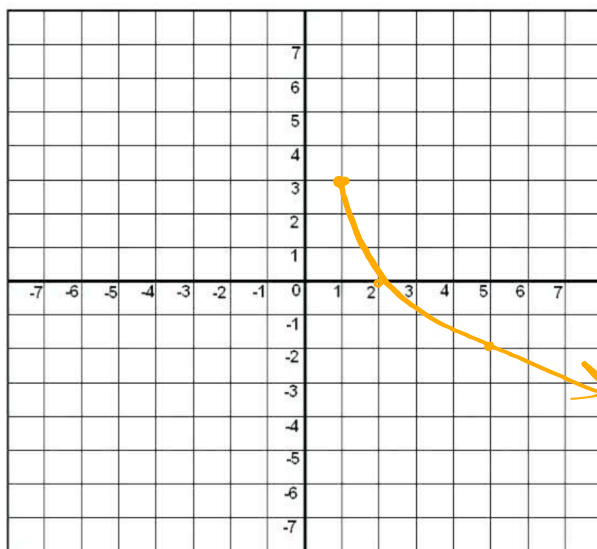
Graph, state the transformations, and find the Domain and Range

$$f(x) = -3\sqrt{x-1} + 3$$

Domain:

Range:

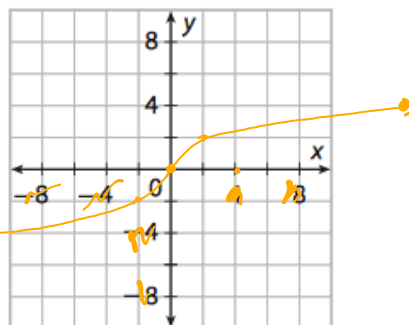
Transformations:



Mar 12-10:19 PM

Graph the following and state the domain, range, and end behavior  $f(x) = \sqrt[3]{x}$

x	y	x, y
-8	-2	
-1	-1	
0	0	
1	1	
8	2	



Domain:  $(-\infty, \infty)$

Range:  $(-\infty, \infty)$

End Behavior

$x \rightarrow -\infty, y \rightarrow -\infty$

$x \rightarrow \infty, y \rightarrow \infty$

Mar 12-10:31 PM

Transformation Form:

$$f(x) = a\sqrt[3]{(x-h)} + k$$

	Vertical (Range)	Horizontal (Domain)
Shift		
Stretch		-----
Reflection		-----

Domain changes

Range changes

Aug 11-8:51 AM

Graph the following and state the transformations, domain and range.

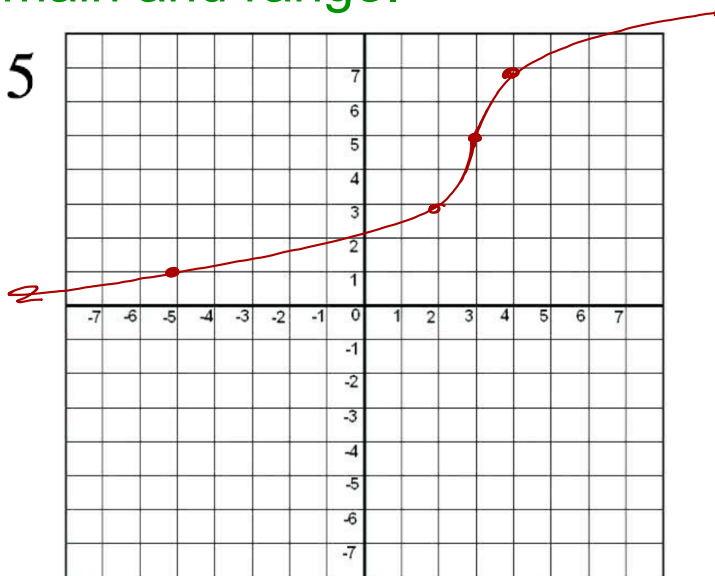
$$g(x) = 2\sqrt[3]{x-3} + 5$$

right 3  
up 5  
v.s. of 2

Domain:

Range:

Transformations:



Mar 12-10:37 PM

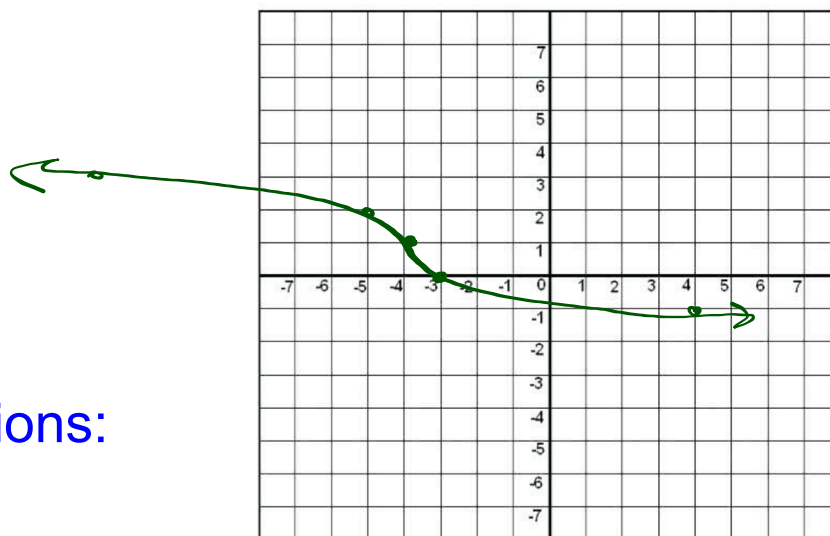
Graph the following and state the transformations, domain and range.

$$f(x) = -\sqrt[3]{x+4} + 1$$

Domain:

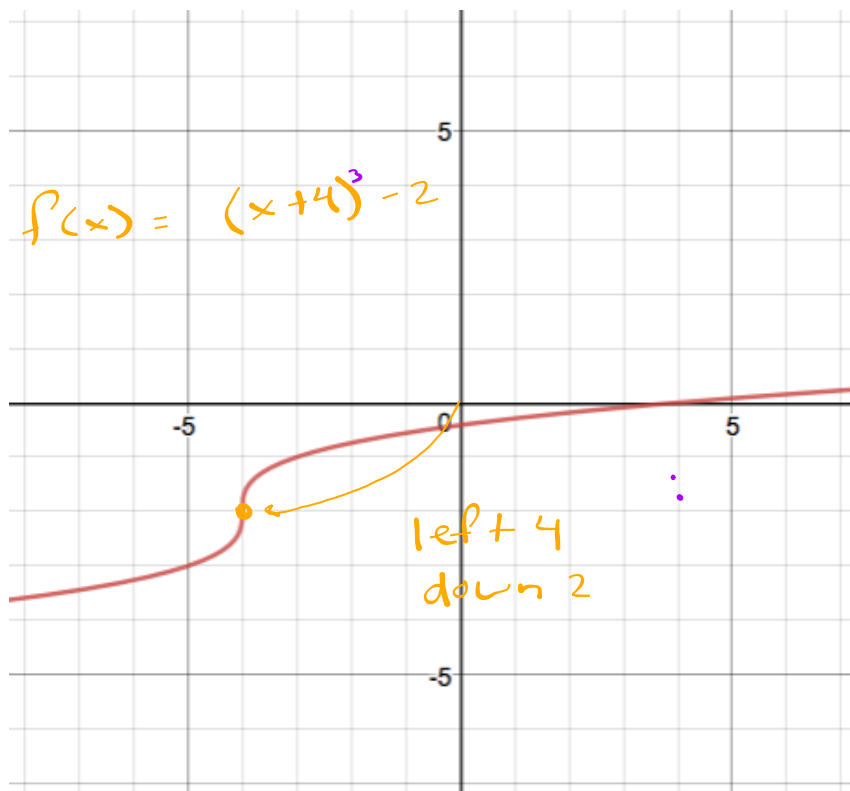
Range:

Transformations:

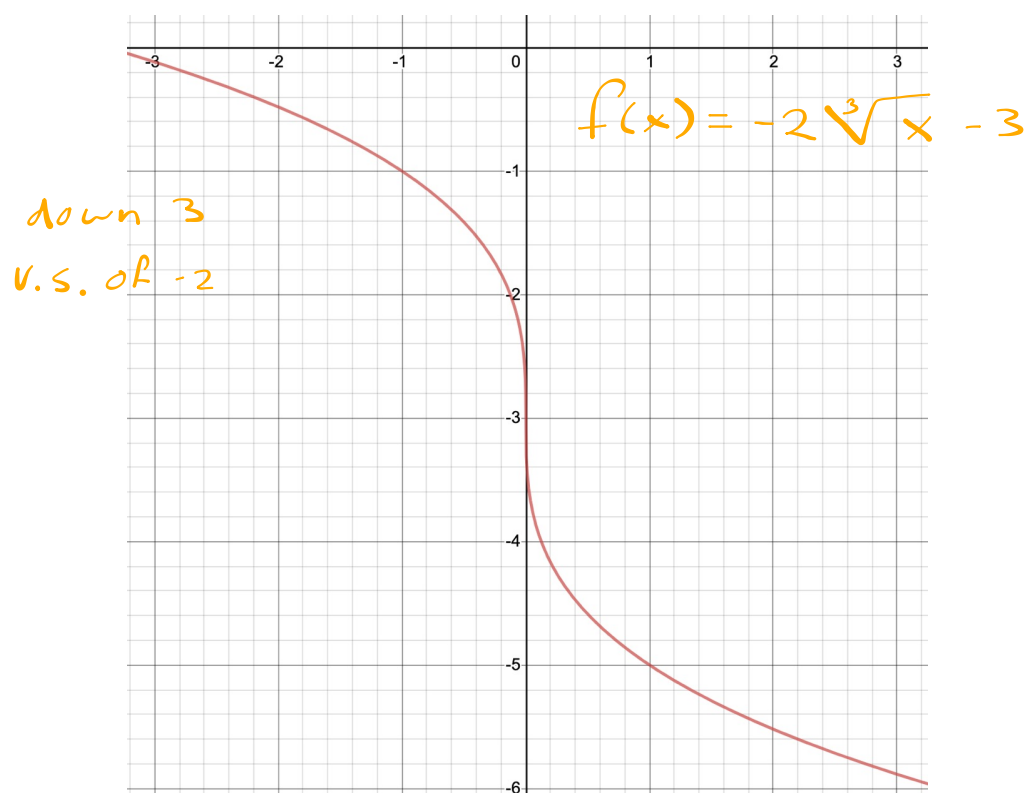


Mar 12-10:37 PM

Write an equation to represent the following

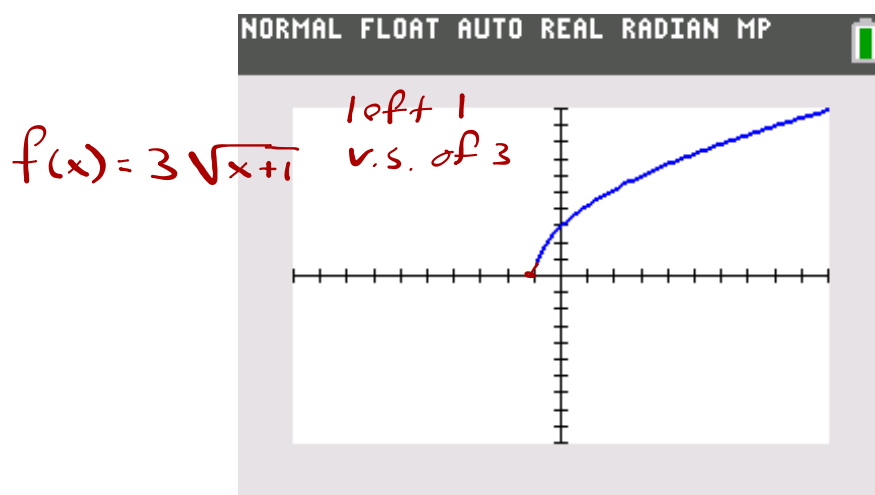


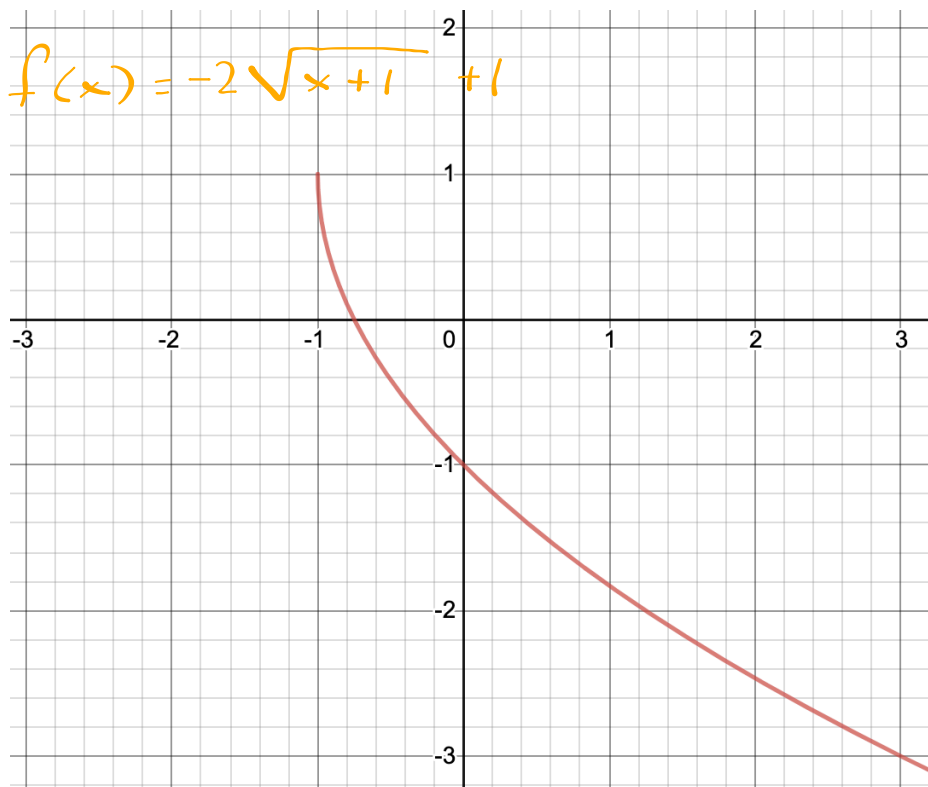
Mar 12-10:42 PM



$$f(x) = -2 \sqrt[3]{x} - 3$$

Write an equation to represent the following





$$f(x) = -2\sqrt{(x+1)} + 1$$



